

Homework to be handed in on 18.10.18



Find all the number bonds to 10 that are hidden within the grid. They are hidden vertically, horizontally and diagonally. There must be a plus sign between the two numbers for it to count. There are 11 calculations to find. One has been done for you. Please record the number sentence underneath.


1	+	9	6	+	6	2	4
2	6	+	4	0	5	+	1
+	10	+	8	+	6	3	+
3	3	+	7	10	1	+	5
5	+	8	+	1	7	6	8
+	5	+	4	2	+	10	2
5	+	2	8	+	3	+	+
5	+	9	+	1	4	0	8

$$6 + 4 = 10$$

Homework to be handed in on 18.10.18

Find all the number bonds to 20 that are hidden within the grid. They are hidden vertically, horizontally and diagonally.


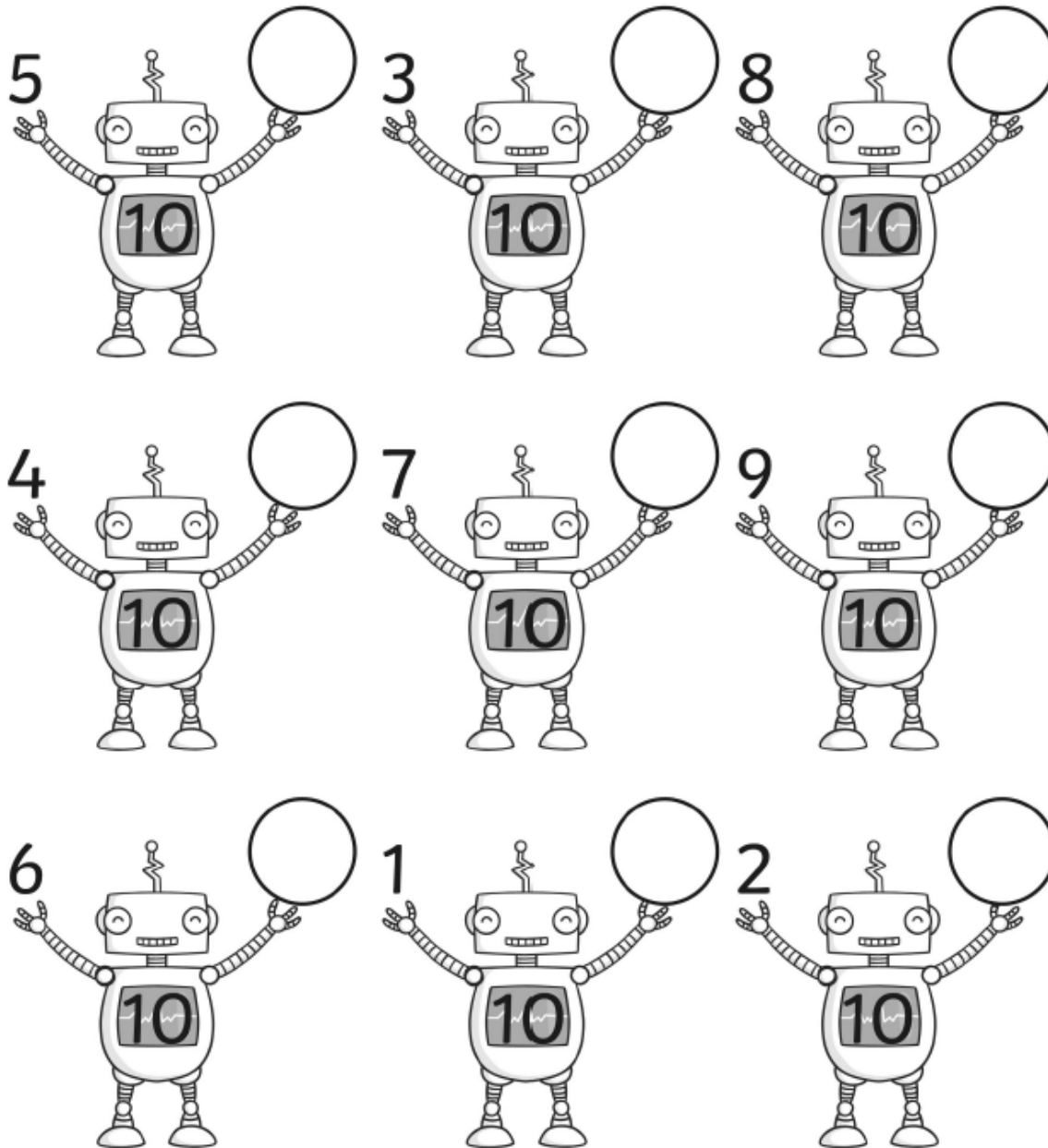
There must be a plus sign between the two numbers for it to count. One has been done for you. Please record the number sentence underneath.



1	+	19	6	+	6	2	14
2	16	+	4	0	5	+	1
+	10	+	10	+	6	3	+
3	13	+	7	20	2	+	18
15	+	18	3	+	17	6	8
+	5	+	3	2	+	20	12
5	+	2	8	+	3	+	+
5	+	19	+	1	4	0	8

$$1 + 19 = 20$$

Can you find the missing number bond to make 10 in the robot's tummy?



Homework to be handed in on 18.10.18

You can use your hands and fingers to support you but remember to try to avoid counting.